

PAYA LEBAR METHODIST GIRLS' SCHOOL (PRIMARY)

END-OF-YEAR EXAMINATION, 2024

PRIMARY FIVE

**MATHEMATICS
PAPER 1
(BOOKLET A)**

NAME : _____ ()

CLASS : P 5 _____

DATE : 24 October 2024

Total Time for Booklets A and B: 1 hour

INSTRUCTIONS TO CANDIDATES

1. Do not turn over this page until you are told to do so.
2. Follow all the instructions carefully.
3. Answer all questions.
4. Shade your answers in the Optical Answer Sheet (OAS) provided.
5. You are **not** allowed to use a calculator.

	Marks Obtained / Maximum Marks
PAPER 1(Booklet A)	/ 20
PAPER 1(Booklet B)	/ 25
PAPER 2	/ 55
TOTAL	/ 100

Parent's Signature: _____

Questions 1 to 10 carry 1 mark each. Questions 11 to 15 carry 2 marks each.
For each question, four options are given. One of them is the correct answer.
Make your choice (1, 2, 3 or 4). Shade the correct oval (1, 2, 3 or 4) on the Optical Answer Sheet. (20 marks)

1. Which of the following is twenty-five thousand and forty in numerals?

- (1) 2540
- (2) 25 040
- (3) 25 400
- (4) 250 040


2. Which of the following is a common multiple of 4 and 6?

- (1) 10
- (2) 12
- (3) 16
- (4) 18

3. Express $1\frac{1}{5}$ as a decimal.

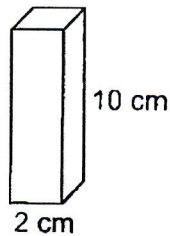
- (1) 1.1
- (2) 1.14
- (3) 1.20
- (4) 1.25

4. The figure is divided into 20 equal parts.
What percentage of the figure is shaded ?



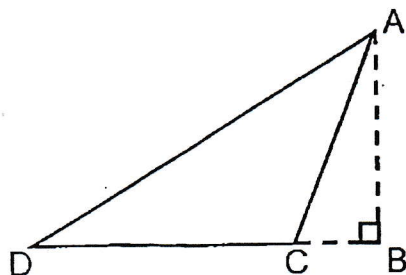
- (1) 25%
- (2) 20%
- (3) 5%
- (4) 4%
5. A solid cuboid of height 10 cm has a square base of side 2 cm.
What is its volume?

- (1) 20 cm^3
- (2) 40 cm^3
- (3) 120 cm^3
- (4) 200 cm^3

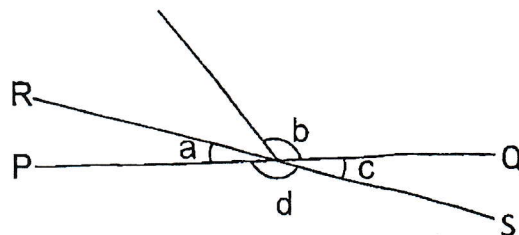


6. A printer takes 2 min to print 3 posters.
At the same rate, how long will it take to print 27 posters?
- (1) 6 min
- (2) 9 min
- (3) 16 min
- (4) 18 min

7. For triangle ACD below, name the base that is related to height AB.




- (1) AC
 - (2) CD
 - (3) DA
 - (4) DB
8. In the figure, PQ and RS are straight lines. Which two angles are equal?



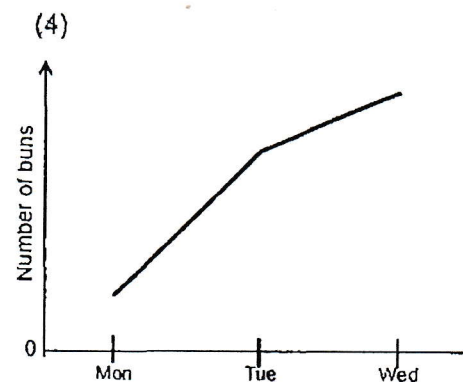
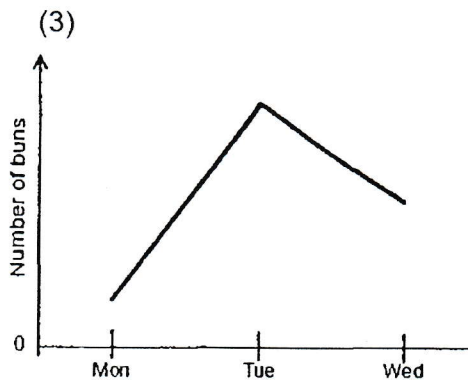
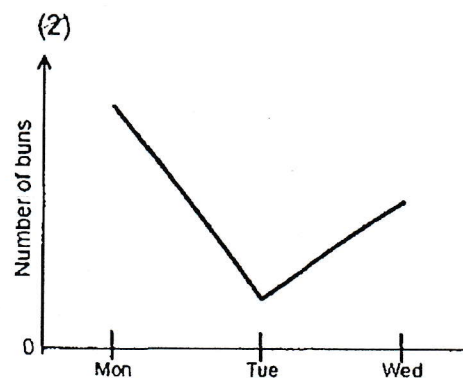
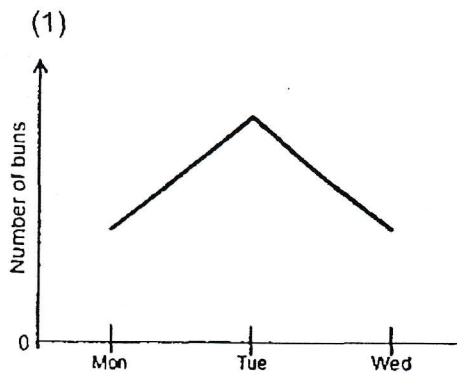
- (1) $\angle a$ and $\angle c$
- (2) $\angle a$ and $\angle d$
- (3) $\angle b$ and $\angle c$
- (4) $\angle b$ and $\angle d$

9. The figure below shows 16 squares. What is the least number of squares that must be shaded so that the line XY becomes a line of symmetry?

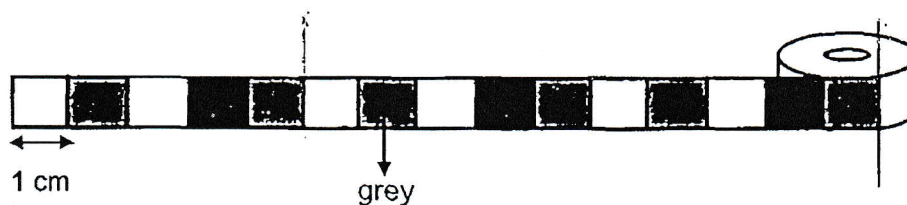


- (1) 5
(2) 2
(3) 3
(4) 4

10. The graph below shows the number of buns sold by a shop from Monday to Wednesday. The number of buns sold by the shop increased by 40 from Monday to Tuesday and decreased by 20 from Tuesday to Wednesday. Which graph shows the number of buns sold from Monday to Wednesday?



11. A roll of tape is made up of white, grey and black segments. Each segment is 1 cm long. The segments follow a repeated pattern as shown below. A piece of tape 60 cm long is cut from the roll. In that piece, how many grey segments are there ?

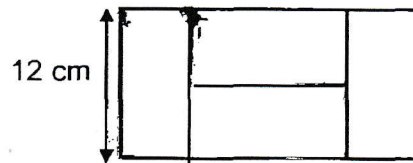


- (1) 12
(2) 15
(3) 20
(4) 24
12. During a sale, a dress was sold at a discount of 20%. What was the price of the dress after the discount?



- (1) \$18
(2) \$54
(3) \$70
(4) \$72

13. The figure is made up of 4 identical small rectangles. The length of each small rectangle is 12 cm. What is the area of the figure?



- (1) 144 cm^2
- (2) 192 cm^2
- (3) 288 cm^2
- (4) 576 cm^2
14. A group of children was asked to choose their favourite canteen stall. The table represents the children's choices. 55% of the children chose Korean food and Japanese food. Part of the table is covered by an ink blot.

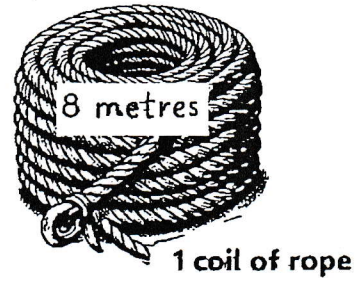
Canteen Stall	Number of children
Thai Food	16
Korean Food	
Japanese Food	
Western Food	20

What was the total number of children who chose Korean food and Japanese food?

- (1) 32
- (2) 36
- (3) 44
- (4) 48

15. Tanya needs 23 pieces of rope for some outdoor activities. Each piece of rope needs to be 3 m in length. Rope is sold in coils of 8 m each. What is the least number of coils of rope that Tanya needs to buy?

- (1) 12
- (2) 11
- (3) 9
- (4) 8



End of Booklet A

PAYA LEBAR METHODIST GIRLS' SCHOOL (PRIMARY)

END-OF-YEAR EXAMINATION, 2024

PRIMARY FIVE

MATHEMATICS

PAPER 1

(BOOKLET B)

NAME _____ ()

CLASS : P 5 _____

DATE : 24 October 2024

Total Time for Booklets A and B: 1 hour

INSTRUCTIONS TO CANDIDATES

1. Do not turn over this page until you are told to do so.
2. Follow all the instructions carefully.
3. Answer all questions.
4. You are **not** allowed to use a calculator.

	Marks Obtained	/	Maximum Marks
Booklet B		/	25

Questions 16 to 20 carry 1 mark each. Write your answers in the spaces provided.
For questions which require units, give your answers in the units stated. (5 marks)

Do not write
in this space

16. Find the value of $1 - \frac{1}{4} - \frac{1}{6}$

Ans: _____

17. Find the missing number in the box.

$$12 : 16 = 18 : \boxed{?}$$

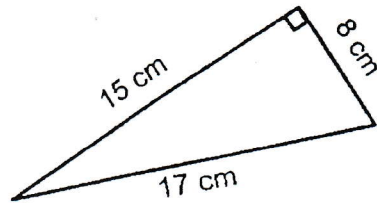
Ans: _____

18. Aileen painted her room from 9.30 a.m. to 11.15 a.m. How much time did Aileen spend painting her room? Give your answer in h and min.

Ans: _____ h _____ min

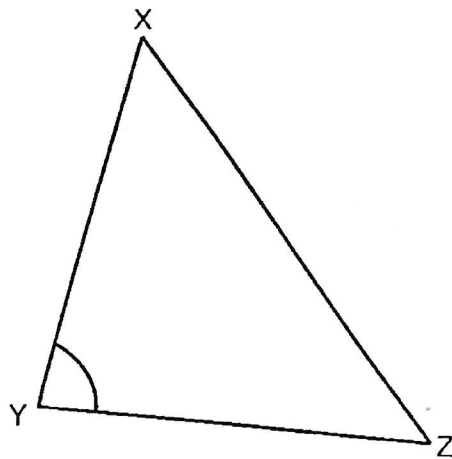
Do not write
in this space

19. The figure shows a right-angled triangle.
Find the area of the triangle.



Ans: _____ cm²

20. Measure and write down the size of $\angle XYZ$.



Ans: _____ °

Questions 21 to 30 carry 2 marks each. Show your working clearly and write your answers in the spaces provided. For questions which require units, give your answers in the units stated. (20 marks)

Do not write
in this space

21. (a) Round 15 742 to the nearest thousand.

Ans: (a) _____

(b) Nicole listed the factors of 45 below:

1, 5, 9, 45

She missed out two factors. What were the two missing factors?

Ans: (b) _____ and _____

22. (a) Find the value of $\frac{1}{2} \times \frac{3}{4}$

Ans: (a) _____

(b) Find the value of 5.24×7 . Give your answer correct to 1 decimal place.

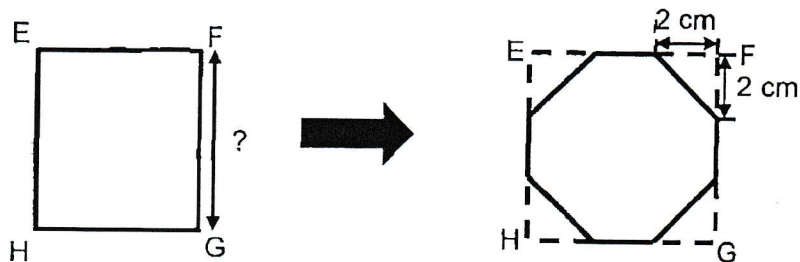
Ans: (b) _____

23. Mrs Lim had 220 dolls for sale. She sold 35% of them last week.
How many dolls did she sell last week?

Do not write
in this space

Ans: _____

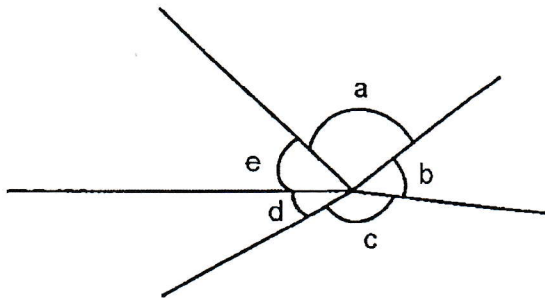
24. EFGH is a ~~square~~ piece of paper. Four identical triangles are cut out as shown. The ~~remaining~~ piece of paper has an area of 92 cm^2 . What is the area of the square piece of paper?



Ans: _____ cm^2

25.

Do not write
in this space



(a) Name the smallest angle.

Ans: (a) \angle _____

(b) Name the two angles that are greater than 90° .

Ans: (b) \angle _____ and \angle _____



26. Anna has a number of paper clips in three colours: blue, red and green. $\frac{5}{9}$ of the paper clips are blue. The number of red paper clips is half the number of blue paper clips. What fraction of the paper clips are green?
Give your answer in the simplest form.

Do not write
in this space

Ans: _____

27. The table shows how much a company charges for a cleaning job.

First 2 hours	\$110
Every additional hour	\$30

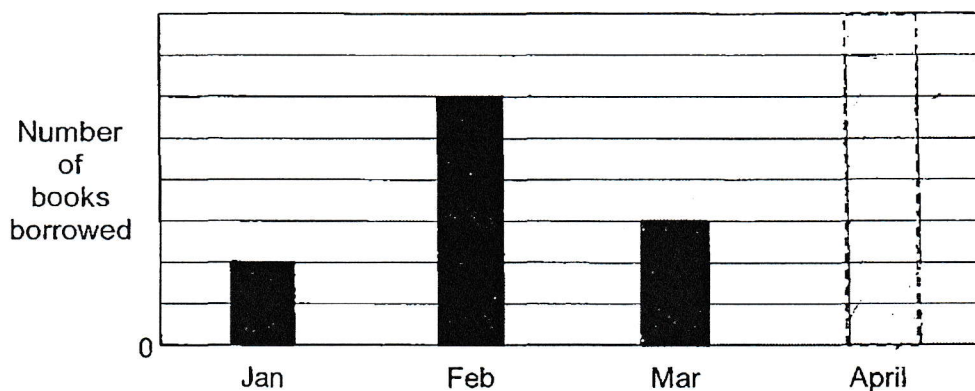
Teresa paid the company \$200 for a cleaning job.
How many hours of cleaning did she pay for?

Ans: _____ h

Use the information below to answer questions 28 and 29.

Do not write
in this space

The bar graph shows the number of books borrowed by Class 5A from January to April. The number of books is not shown on the scale.



28. $\frac{1}{3}$ of the books were borrowed in February. Draw and shade the bar that shows the number of books borrowed in April.

29. The average number of books borrowed for the 4 months was 54. How many books were borrowed in January?

Ans: _____

30. In Figure 1, ABCD is a rectangle with a perimeter of 48 cm.

Three such rectangles are joined to form rectangle WXYZ in Figure 2.

The perimeter of WXYZ is 120 cm.




Figure 1




Figure 2

What is the length of AB?

Do not write
in this space

Ans: _____ cm



PAYA LEBAR METHODIST GIRLS' SCHOOL (PRIMARY)

END-OF-YEAR EXAMINATION, 2024

PRIMARY FIVE

**MATHEMATICS
PAPER 2**

NAME : _____ ()

CLASS : P 5 _____

DATE : 24 October 2024

Total Time for Paper 2: 1 h 30 min

INSTRUCTIONS TO CANDIDATES

1. Do not turn over this page until you are told to do so.
2. Follow all the instructions carefully.
3. Answer all questions.
4. Write your answers in this booklet.
5. You are allowed to use a calculator.

	Marks Obtained	/	Maximum Marks
PAPER 2		/	55


Questions 1 to 5 carry 2 marks each. Show your working clearly and write your answers in the spaces provided. For questions which require units, give your answers in the units stated. (10 marks)

Do not write in this space

1. Sarah bought 5 bottles of water and 4 buns for \$21.20.

Agnes bought 1 bottle of water and 1 bun for \$4.50.

How much did 1 bottle of water cost?



\$21.20

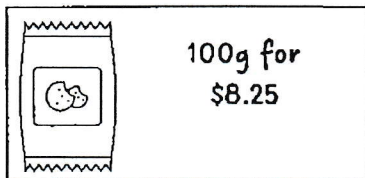


\$4.50

Ans: \$ _____

2. Three friends shared the cost of 800 g of cookies in the ratio 1 : 4 : 5.

What was the cost for the smallest share?



Ans: \$ _____

3. What is the price of the chair after adding 9% GST?

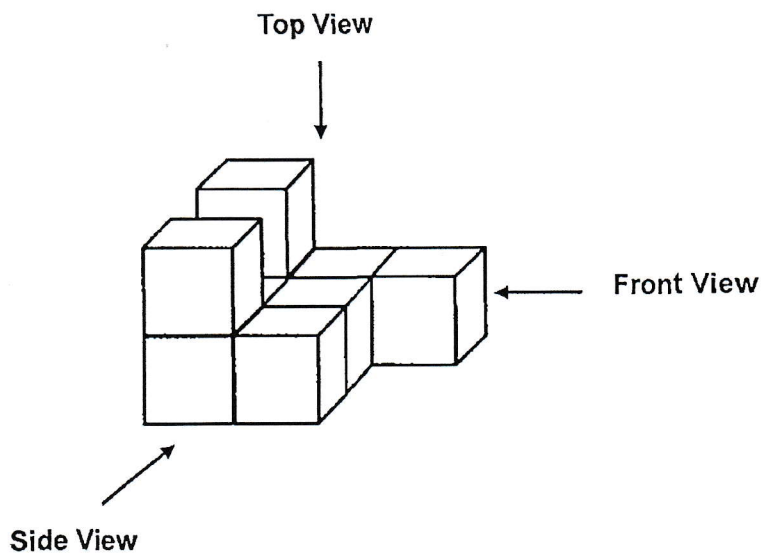
Do not write
in this space



Ans: \$ _____

4. The following solid is made up of 8 unit cubes.
Draw the top and side views of the solid on the square grid below.

Do not write
in this space

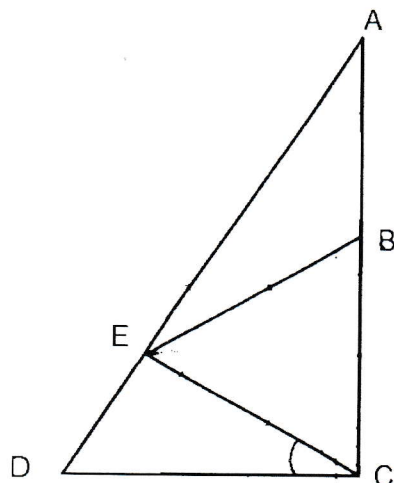


Top View

Side View

5. In the figure, ACD is a right-angled triangle. BCE is an equilateral triangle. BEA is an isosceles triangle with $AB = BE$. B is the mid-point of AC .

Do not write
in this space



Each statement below is either true, false or not possible to tell from the information given. For each statement, put a tick (✓) in the correct column.

Statement	True	False	Not possible to tell
AEC is a right-angled triangle.			
$\angle CAE$ is the same as $\angle DCE$.			
The area of triangle BEC is greater than the area of triangle ABE .			

For questions 6 to 17, show your working clearly and write your answers in the spaces provided. The number of marks available is shown in brackets [] at the end of each question or part-question. (45 marks)

Do not write
in this space

6. The fee for parking a car at a mall is based on the charges shown in the table below.

First hour	\$4.50
Every additional 30 min or less	\$2.00

- (a) Mrs Wu parked her car at the mall from 10.40 a.m. to 12.05 p.m.
How much was her parking fee?

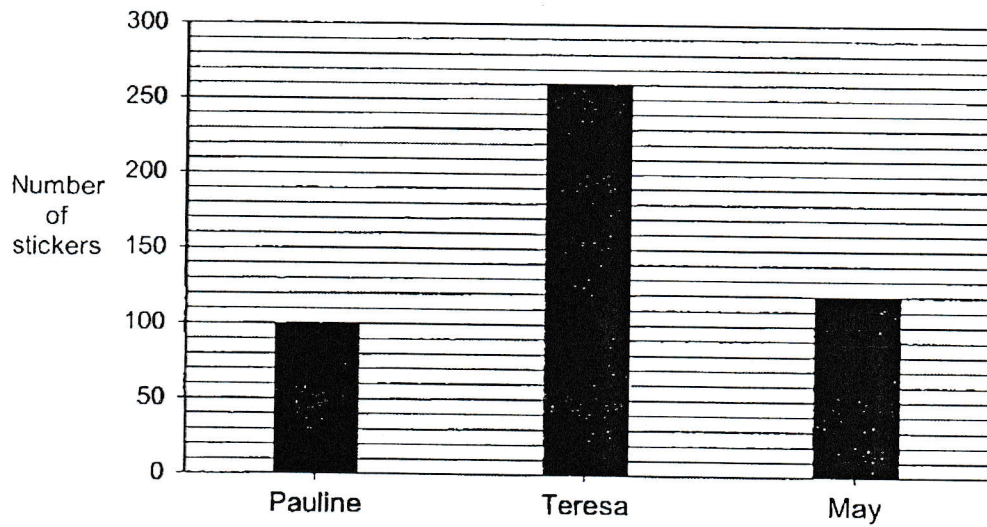
Ans: _____ [1]

- (b) Mrs Lim paid \$18.50 for her parking at the mall. She left the mall at 3.15 p.m.
What would be the earliest time she drove into the carpark?

Ans: _____ [2]



7. The bar graph shows the number of stickers that three girls had collected.



Do not write
in this space

- (a) What was the average number of stickers the 3 girls had collected?

Ans: (a) _____ [2]

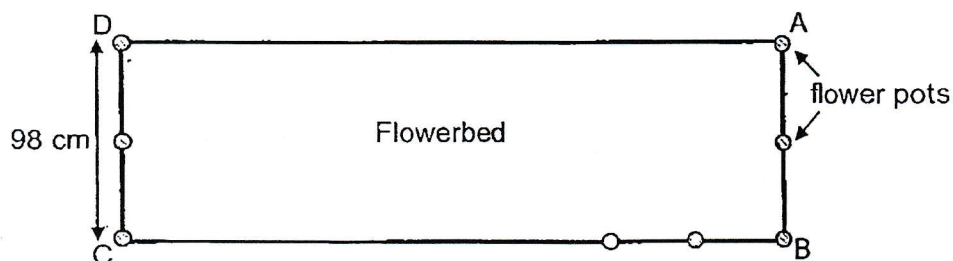
- (b) Bryan then joined in the group and the average number of stickers collected by the four children was 26 more than the average number of stickers collected by the three girls. How many stickers did Bryan collect ?

Ans: (b) _____ [2]



8. A total of 16 pots of flowers are arranged at an equal distance apart along three sides, AB, BC and CD, of a rectangular flowerbed. The figure shows part of the arrangement. The breadth of the flowerbed is 98 cm. What is the length of BC?

Do not write
in this space



Ans: _____ [3]

9. A box contained black pens and red pens. At first, the number of black pens was $\frac{1}{4}$ the number of red pens. After $\frac{1}{3}$ of the black pens and $\frac{5}{8}$ of the red pens were sold, 117 pens were left.

(a) What fraction of the pens were sold?

Leave your answer in the simplest form.

Ans: (a) _____ [1]

(b) What was the total number of pens in the box at first?

Ans: (b) _____ [2]

Do not write
in this space



10. Mr Goh had an equal number of apples and oranges. He gave 121 apples and 27 oranges to Nicole. He then gave the remaining fruits to Suki. The number of oranges Suki received was thrice the number of apples.

Do not write
in this space

(a) How many apples did Suki receive ?

Ans: (a) _____ [2]

(b) How many fruits did Mr Goh have at first ?

Ans: (b) _____ [2]



11. Every student in a camp signed up for one activity.
25% of the students signed up for Soccer.

Do not write
in this space

Activity	Percentage of students
Soccer	25%
Basketball	?
Dance	?

- (a) The ratio of the number of students who chose Basketball to the number of students who chose Dance was 4 : 1.
What percentage of the students signed up for Dance?

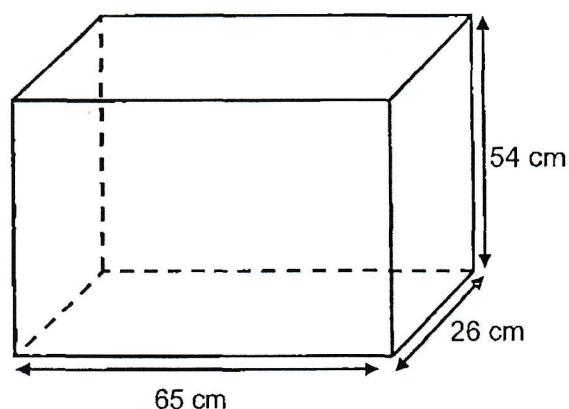
Ans: (a) _____ [2]

- (b) There were 320 students at the camp.
15% of the students who signed up for Soccer were girls.
How many boys signed up for Soccer ?

Ans: (b) _____ [2]



12. Andy and Betty each has a rectangular tank as shown in the figure.



Do not write
in this space

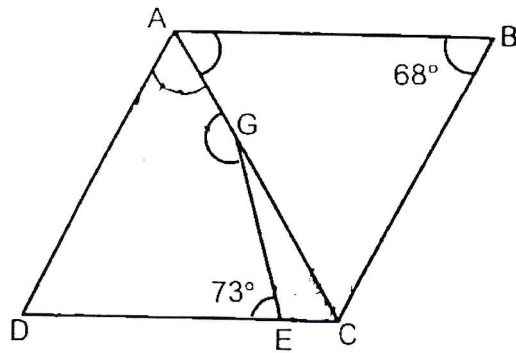
- (a) Andy fills his tank completely with water. What is the volume of the water in the rectangular tank? Give your answer in ℓ and $\text{m}\ell$

Ans: (a) _____ [2]

- (b) Betty puts as many 3-cm cubes as possible into her empty tank. What is the greatest number of cubes that her rectangular tank can hold?

Ans: (b) _____ [2]

13. ABCD is a rhombus. AGC is a straight line.



- (a) Find $\angle BAC$.

Ans: (a) _____ [1]

- (b) Find $\angle EGA$.

Ans: (b) _____ [2]

Do not write
in this space

14. There were 442 guests at a party. After $\frac{2}{3}$ of the men and $\frac{1}{5}$ of the women left the party, there were an equal number of men and women remaining at the party.


Do not write
in this space

(a) How many women left the party?

Ans: (a) _____ [2]

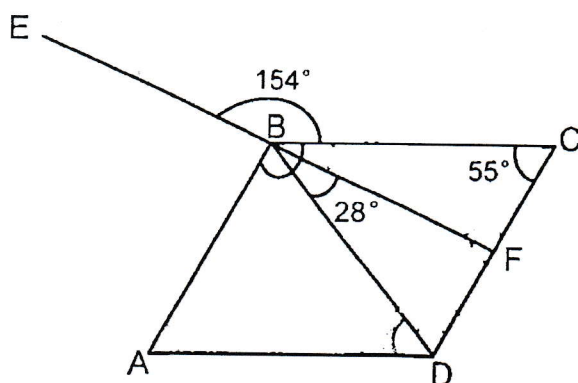
(b) How many guests remained at the party?

Ans: (b) _____ [2]



Do not write
in this space

15. In the figure below, ABCD is a parallelogram and EBF is a straight line.
 $\angle CBE = 154^\circ$, $\angle BCD = 55^\circ$ and $\angle DBF = 28^\circ$



- (a) Find $\angle CBA$.

Ans: (a) _____ [1]

- (b) Find $\angle BDA$.

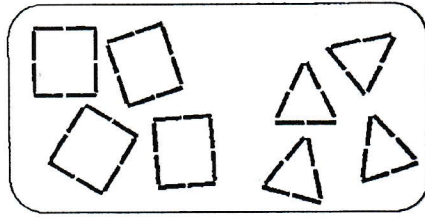
Ans: (b) _____ [2]

- (c) Circle the words that describe Triangle ABD correctly in the following statement:

Triangle ABD (is / is not) an isosceles triangle because
it (has / does not have) 2 equal angles. [1]

16. Mavin and Rene used straws to make squares and triangles.
8 straws are used to make a square and 6 straws are used to make a triangle.

Do not write
in this space



- (a) Mavin used the same number of straws to make some squares and some triangles. He used fewer than 50 straws for each shape. What was the greatest possible number of straws that he used to make the triangles?

Ans: (a) _____ [1]

- (b) How many squares did Mavin make?

Ans: (b) _____ [1]

Go on to the next page

Continue from the previous page

- (c) Rene made 7 more squares than triangles. The total number of straws she used was 462. How many squares did she make?

Ans: (c) _____ [3]



17. Alice, Ben, Chris and Dion shared the cost of a gift.

Alice paid $\frac{2}{5}$ of the cost of the gift. Ben paid $\frac{3}{10}$ of the remaining cost of the gift and Chris paid \$18 more than Ben. Dion paid \$66 for the remaining cost of the gift.

(a) What was the total amount Ben, Chris and Dion paid for the gift?

Ans: (a) _____ [2]

(b) How much did the gift cost?

Ans: (b) _____ [2]

Do not write
in this space



End of Paper 2

SCHOOL : PAYA LEBAR METHODIST GIRLS' PRIMARY
 LEVEL : PRIMARY 5
 SUBJECT : MATHEMATICS
 TERM : SA2
 CONTACT :

PAPER 1

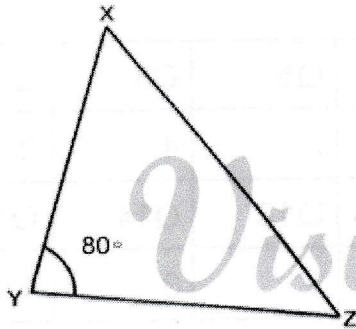
BOOKLET A

Q1	Q2	Q3	Q4	Q5	Q6	Q7	Q8
2	2	3	1	2	4	2	1
Q9	Q10	Q11	Q12	Q13	Q14	Q15	
3	3	4	4	3	3	1	

BOOKLET B

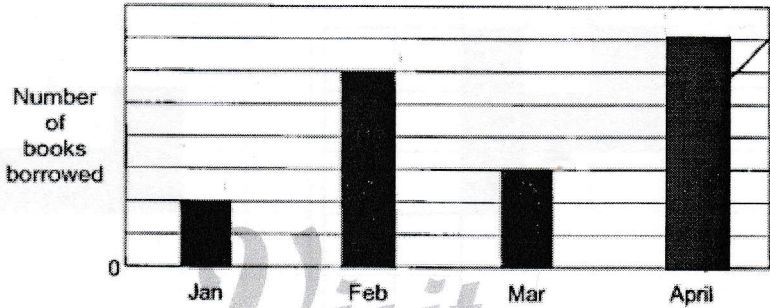
Q16	$1 - \frac{1}{4} - \frac{1}{6}$ $= \frac{12}{12} - \frac{3}{12} - \frac{2}{12}$ $= \frac{12 - 3 - 2}{12}$ $= \frac{7}{12}$
Q17	$12 \div 2 : 16 \div 2$ $6 \times 3 : 8 \times 3$ $18 : 24$
Q18	<p>9.30 a.m. 10.30 a.m. 11.00 a.m. 11.15 a.m.</p>

for more papers

Q19	$\text{Area} = \frac{1}{2} \times \text{base} \times \text{height}$ $= \frac{1}{2} \times 8 \text{ cm} \times 15 \text{ cm}$ $= \frac{1}{2} \times 120 \text{ cm}^2$ $= 60 \text{ cm}^2$
Q20	
Q21 (a)	$15\,742 \approx 16\,000$
Q21 (b)	<p>Factors of 45 = 1, 3, 5, 9, 15, 45</p> <p><i>for more papers</i></p> <p>Missing factors: 3, 15</p>
Q22 (a)	$\frac{1}{2} \times \frac{3}{4}$ $= \frac{1 \times 3}{2 \times 4}$ $= \frac{3}{8}$
Q22 (b)	$5.24 \times 7 = 36.68$ <p>Answer: 36.7</p>
Q23	$100\% = 220$ $1\% = 220 \div 100 = 2.20$ $35\% = 2.20 \times 3.5 = 7.7$

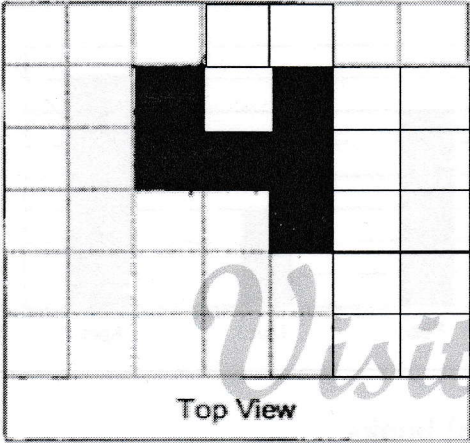
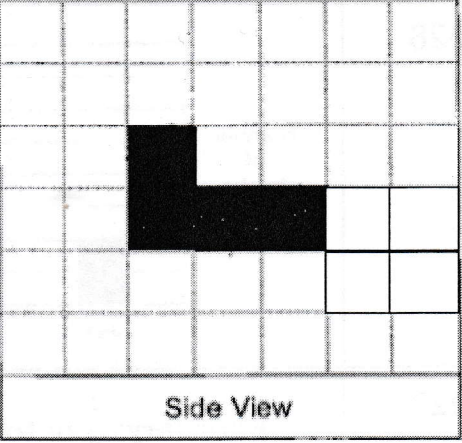
FREETESTPAPER.com

for more papers

Q24	<p>Area of each triangle = $\frac{1}{2} \times 2 \times 2 = 2 \text{ cm}^2$</p> <p>Area of four triangles = $4 \times 2 = 8 \text{ cm}^2$</p> <p>Total area of square = $92 + 8 = 100 \text{ cm}^2$</p> <p>Area of square = 100 cm^2</p> <p>Length of one side = $\sqrt{100} = 10 \text{ cm}$</p>										
Q25 (a)	<d										
Q25 (b)	<c and <a										
Q26	<p>Fraction of blue paper clips = $\frac{5}{9}$</p> <p>Fraction of red paper clips = $\frac{1}{2} \times \frac{5}{9} = \frac{5}{18}$</p> <p>Fraction of green paper clips = $1 - \frac{5}{9} - \frac{5}{18}$</p> <p>$= \frac{18}{18} - \frac{10}{18} - \frac{5}{18}$</p> <p>$= \frac{3}{18} = \frac{1}{6}$</p>										
Q27	<p>$200 - 110 = 90$</p> <p>$90 \div 30 = 3$</p> <p>$3 + 2 = 5$</p>										
Q28	 <table border="1"> <caption>Books Borrowed by Month</caption> <thead> <tr> <th>Month</th> <th>Number of books borrowed</th> </tr> </thead> <tbody> <tr> <td>Jan</td> <td>2</td> </tr> <tr> <td>Feb</td> <td>6</td> </tr> <tr> <td>Mar</td> <td>3</td> </tr> <tr> <td>April</td> <td>7</td> </tr> </tbody> </table>	Month	Number of books borrowed	Jan	2	Feb	6	Mar	3	April	7
Month	Number of books borrowed										
Jan	2										
Feb	6										
Mar	3										
April	7										
Q29	<p>February: $\frac{1}{3}$ of total books</p> <p>Total books = $6u \times 3 = 18u$</p> <p>April: $18u - (2u + 6u + 3u) = 7u$</p>										

Q30	Perimeter of ABCD = 48cm $2 \times (\text{Length} + \text{Width}) = 48\text{cm}$ $\text{Length} + \text{Width} = 24\text{cm}$ Perimeter of WXYZ = 120cm $2 \times (3 \times \text{Length} + \text{Width}) = 120\text{cm}$ $3 \times \text{Length} + \text{Width} = 60\text{cm}$ $3 \times \text{Length} + \text{Width} - (\text{Length} + \text{Width}) = 60\text{cm} - 24\text{cm} = 36\text{cm}$ $2 \times \text{Length} = 36\text{cm}$ $\text{Length (AB)} = 18\text{cm}$
-----	------------------------------------------------------------------------------------------------------------------------------------------------------------------------------------------------------------------------------------------------------------------------------------------------------------------------------------------------------------------------------------------------------------------------------------------------------------------------------------------------------

PAPER 2

Q1	$\$4.50 \times 5 = \22.50 $1 \text{ Bun} = \$22.50 - \$21.20 = \$1.30$ $1 \text{ Water} = \$4.50 - \$1.30 = \$3.20$
Q2	Total ratio = $1 + 4 + 5 = 10$ Smallest share = $800\text{g} \div 10 = 80\text{g}$ $100\text{g} = \$8.25$ $1\text{g} = \$8.25 \div 100 = \0.0825 $80\text{g} = \$0.0825 \times 80 = \6.60
Q3	$100\% = \$370$ $1\% = \$3.70 \div 100 = \3.70 $109\% = \$3.70 \times 109 = \403.30
Q4	<div style="display: flex; justify-content: space-around; align-items: flex-end;"> <div style="text-align: center;">  <p>Top View</p> </div> <div style="text-align: center;">  <p>Side View</p> </div> </div>

FREETESTPAPER.com

for more papers

Q5	<table><tr><th>Statement</th><th>True</th><th>False</th><th>Not possible</th></tr><tr><td>AEC is a right-angled triangle.</td><td>✓</td><td></td><td></td></tr><tr><td>∠CAE is the same as ∠DCE .</td><td>✓</td><td></td><td></td></tr><tr><td>The area of triangle BEC is greater than the area of triangle ABE.</td><td></td><td>✓</td><td></td></tr></table>	Statement	True	False	Not possible	AEC is a right-angled triangle.	✓			∠CAE is the same as ∠DCE .	✓			The area of triangle BEC is greater than the area of triangle ABE.		✓	
Statement	True	False	Not possible														
AEC is a right-angled triangle.	✓																
∠CAE is the same as ∠DCE .	✓																
The area of triangle BEC is greater than the area of triangle ABE.		✓															
Q6 (a)	Total fee: \$4.50 + \$2.00 = \$6.50																
Q6 (b)	Total paid: \$18.50 First hour: \$4.50 Remaining: \$18.50 - \$4.50 = \$14 Additional time: \$14 ÷ \$2 = 7 (30 mins) = 3.5 hours Total time parked: 1 hour + 3.5 hours = 4.5 hours 3:15 p.m. - 4.5 hours = 10:45 a.m.																
Q7 (a)	100 + 260 + 120 = 480 480 ÷ 3 = 160																
Q7 (b)	160 + 26 = 186 186 x 4 = 744 744 - 480 = 264																
Q8	16 - 6 = 10 98 ÷ 2 = 49 10 + 1 = 11 49 x 11 = 539																
Q9 (a)	Red pens = 4 parts, Black pens = 1 part Total = 5 parts Sold: Black pens = $\frac{1}{3}$ of 1 part Red pens = $\frac{5}{8}$ of 4 parts = 2.5 parts Total sold = $\frac{1}{3} + 2.5 = \frac{17}{6}$ Fraction sold = $\frac{\frac{17}{6}}{5} = \frac{17}{30}$																
Q9 (b)	13u = 117 1 u = 117 ÷ 13 = 9 30u = 9 x 30 = 270																

for more papers

Q10 (a)	$121 - 27 = 94$ $2u = 94$ $1u = 94 \div 2 = 47$
Q10 (b)	$4u = 47 \times 4 = 188$ $188 + 121 + 27 = 336$
Q11 (a)	$100\% - 25\% = 75\%$ $75\% \div 5 = 15\%$
Q11 (b)	$25\% \times 320 = 80$ $100\% - 15\% = 85\%$ $85\% \times 80 = 68$
Q12 (a)	$65 \times 26 \times 54 = 91\,260 \text{ (cm}^3\text{)}$ $91\,260 \text{ cm}^3 = 91.26 \text{ L}$
Q12 (b)	$65 \div 3 = 21\text{R}2$ $26 \div 3 = 8\text{R}2$ $54 \div 3 = 18$ $18 \times 8 \times 21 = 3024$
Q13 (a)	$180^\circ - 68^\circ = 112^\circ$ $112^\circ \div 2 = 56^\circ$
Q13 (b)	$180^\circ - 56^\circ - 107^\circ = 17^\circ$ $180^\circ - 17^\circ = 163^\circ$
Q14 (a)	$\frac{1}{3} = 4u$ $4 \times 4 + 1 = 17$ $17u = 442$ $1u = \frac{442}{17} = 26$
Q14 (b)	$4 + 4 = 8$ $8u = 26 \times 8$ $= 208$

for more papers

Q15 (a)	$180^\circ - 55^\circ = 125^\circ$
Q15 (b)	$180^\circ - 55^\circ = 125^\circ$ $180^\circ - 99^\circ = 81^\circ$ $180^\circ - 81^\circ - 28^\circ = 71^\circ$ $125^\circ - 71^\circ = 54^\circ$
Q15 (c)	Is not Does not have
Q16 (a)	One triangle uses 6 straws, $6 \times 8 = 48$ straws
Q16 (b)	$48 \div 8 = 6$
Q16 (c)	$7 \times 8 = 56$ $462 - 56 = 406$ $406 \div (8+6) = 29$ $29 + 7 = 36$
Q17 (a)	$\$66 + \$18 = \$84$ $4u = \$84$ $1u = \$84 \div 4 = \21 $10u = 21 \times 10 = \$210$
Q17 (b)	$\$210 \div 3 = \70 $\$70 \times 5 = \350

Visit
FREETESTPAPER.com
 for more papers