



St Hilda's Primary School
Primary 3 Term 2 Weighted Assessment 1 2024
Mathematics

Name: _____ ()

Class: P3/ _____

Date: 7 May 2024

Duration: 55 min

Booklet A:	14
Booklet B:	26
Total:	40

Number of printed pages: 12 (11 printed and 1 blank)

Parent's Signature

Booklet A

Questions 1 to 6 carry 1 mark each. Questions 7 to 10 carry 2 marks each. For each question, four options are given. One of them is the correct answer. Make your choice (1, 2, 3 or 4) and write your answer in the brackets provided. (14 marks)

1. How many hundreds are there in 8300?

- (1) 830
- (2) 300
- (3) 3
- (4) 83

()

2. In 3578, the value of the digit 7 is _____.

- (1) 7
- (2) 70
- (3) 700
- (4) 7000

()

3. In which of the following are the numbers arranged from the smallest to the greatest?

- (1) 4876 4786 , 4867
(2) 4876 4867 , 4786
(3) 4786 4867 , 4876
(4) 4786 4876 , 4867 ()

4. Which of the following shows 4×3 ?

- (1) $4 + 4 + 4 + 4$
(2) $3 + 3 + 3 + 3$
(3) $3 \times 3 \times 3 \times 3$
(4) $4 \times 4 \times 4$ ()

5. How many numbers between 10 and 50 can be divided exactly by 8?

- (1) 5
(2) 2
(3) 3
(4) 4 ()

6. What is the value of 9 ten-cent coins and 4 fifty-cent coins?

- (1) \$1.30
(2) \$2.90
(3) \$3.80
(4) \$4.90 ()

7. Ali bought 39 cherries and Jane bought 18 cherries.
They ate 17 cherries altogether.
How many cherries were left?

- (1) 23
(2) 40
(3) 57
(4) 74 ()

8. A total of 5842 visitors visited a museum in June.
There were 1326 more visitors in June than in May.
How many visitors were there in May?

- (1) 4516
- (2) 4524
- (3) 6168
- (4) 7168

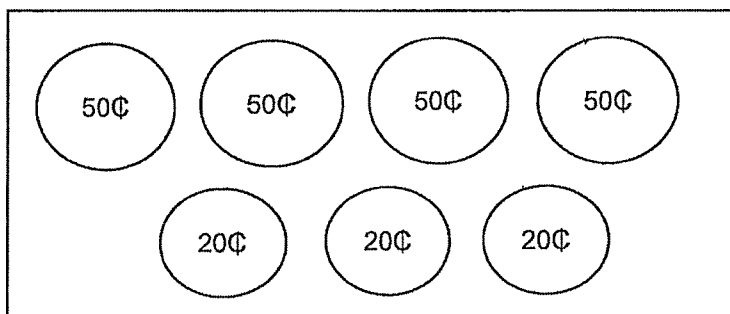
()

9. Sumei has 63 curry puffs.
She needs to pack them in boxes of 7.
How many boxes does she need to pack all the curry puffs?

- (1) 8
- (2) 9
- (3) 10
- (4) 11

()

10. Gabriel has seven coins as shown below.
He used all seven coins below to pay for a drink.
He got back 10¢ change.
What was the cost of the drink?



- (1) \$2.40
- (2) \$2.50
- (3) \$2.60
- (4) \$2.70

()

END OF BOOKLET A
Proceed to BOOKLET B

Booklet B

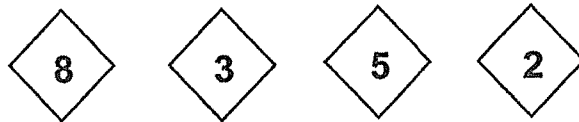
Questions 11 to 20 carry 1 mark each. Questions 21 to 23 carry 2 marks each. Write your answers in the spaces provided. For questions which require units, give your answers in the units stated. (16 marks)

11. Complete the number pattern.

6819 , 6919, _____ , 7119, 7219, 7319

Ans: _____

12. Use all the digits below to form the smallest 4-digit odd number.



Ans: _____

13. Write 9 thousands, 6 tens and 8 ones in numerals.

Ans: _____

14. Subtract 1697 from 6294.

Ans: _____

15. Susan bought 7 boxes of donuts for a party.
There were 6 donuts in each box.
How many donuts did Susan buy altogether?

Ans: _____

16. Jason read 72 pages of his storybook in 9 days.
Every day, he read the same number of pages.
How many pages did Jason read in a day?

Ans: _____

17. $48 \div \star = 8$

The value of \star is _____.

Ans: _____

18. Jane has 30 stickers.
She has 6 times as many stickers as Alice.
How many stickers does Alice have?

Ans: _____

19. Mr Ong bought a lego set for \$26.35 and a board game for \$37.95.
How much did he pay for the two items?

Ans: \$ _____

20. Jane bought 4 boxes of erasers.
There were 10 erasers in each box.
She repacked all the erasers equally into 8 bags.
How many erasers were there in each bag?

Ans: _____

-
21. The difference between two numbers is 345.
The smaller number is 876.
What is the sum of the two numbers?



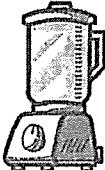
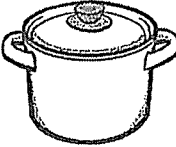
Ans: _____

-
22. A bag of 3 oranges costs \$7. How many oranges can be bought with \$56?

Ans: _____

23. Look at the items below carefully.

JACY'S KITCHEN SUPPLIES

			
frying pan \$28.40	chopping board \$58.70	blender \$65.60	cooking pot \$31.30

Miss Wong bought two of the items above.
She paid with two \$50-notes and received a change of \$6.
Which two items did Miss Wong buy?

Ans: _____ and _____

For questions 24 to 26, show your working clearly and write your equations and word statements in the space provided. The number of marks for each question is shown in the brackets. (10 marks)

24. There were 8000 books in a community library.
5686 books were fiction books while the rest were non-fiction books.

(a) How many non-fiction books were there?

Ans: (a) _____ [1]

(b) How many more fiction books than non-fiction books were there?

Ans: (b) _____ [2]

25. Mrs Gomez baked some cupcakes.
She kept 26 cupcakes for her family and gave the rest equally to 6 neighbours.
Each neighbour received 9 cupcakes.
How many cupcakes did Mrs Gomez bake?

Ans: _____ [3]

26. Last Saturday, Mrs Wang went to the zoo with her two children.
Mrs Wang bought an adult and two children tickets.
An adult ticket cost \$48. It cost \$15 more than a child ticket.

(a) How much did a child ticket cost?

Ans: (a) _____ [2]

(b) How much did Mrs Wang pay for all the three tickets?

Ans: (b) _____ [2]

END OF PAPER

BLANK PAGE

SCHOOL : ST. HILDA'S PRIMARY SCHOOL
LEVEL : PRIMARY 3
SUBJECT : MATH
TERM : 2024 WA1

Q1	Q2	Q3	Q4	Q5	Q6	Q7	Q8	Q9	Q10
4	2	3	2	1	2	2	1	2	2

Q11	7019
Q12	2385
Q13	9068
Q14	$6294 - 1697 = 4597$
Q15	$7 \times 6 = 42$
Q16	$72 \div 9 = 8$
Q17	$48 \div 8 = 6$
Q18	$30 \div 6 = 5$
Q19	$37.95 + 26.35 = \$64.30$
Q20	$4 \times 10 = 40$ $40 \div 8 = 5$
Q21	$876 + 345 = 1221$ $1221 + 876 = 2097$
Q22	$56 \div 7 = 8$ $8 \times 3 = 24$
Q23	$100 - 6 = 94$ $65.60 + 28.40 = 94.00$ Ans : blender and frying pan
Q24	a) $8000 - 5686 = 2314$ There were 2314 non-fiction books. b) $5686 - 2314 = 3372$ There were 3372 more fiction books than non-fiction books.

Q25	$9 \times 6 = 54$ $54 + 26 = 80$ Mrs Gomez baked 80 cupcakes.
Q26	a) $48 - 15 = 33$ A child ticket cost \$33 b) $33 + 33 = 66$ $66 + 48 = 114$ Mrs Wang paid \$114 for the three ticket.