

**Ai Tong School
P5 Mathematics
2023 Term 1 Review**

Name: _____ () Date: _____

Class : 5 _____ Marks: _____ /25

Duration: 35 min Parent's signature: _____

**Follow all instructions. Answer all questions.
You are NOT allowed to use a calculator.**

Section A

Questions 1 to 5 carry 1 mark each. Write your answers in the spaces provided.
For questions which require units, give your answers in the units stated. (5 marks)

- 1 Write six million, four hundred and two thousand and eighty in numerals.

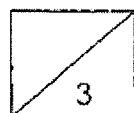
Ans: _____

- 2 There are 359 947 participants in a running event.
Round this number to the nearest thousand.

Ans: _____

- 3 In 6 374 090, the value of the digit 7 is _____.

Ans: _____

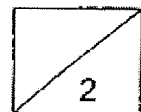


4 What is the value of $28 + (2 + 54) \div 4$?

Ans: _____

5 Express $\frac{5}{8}$ as a decimal.

Ans: _____

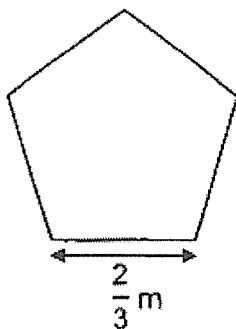


Section B

Questions 6 to 10 carry 2 marks each. Show your working clearly in the space provided for each question and write your answers in the spaces provided.

For questions which require units, give your answers in the units stated. (10 marks)

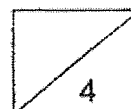
- 6 In the figure below, all sides are equal. What is the perimeter of the figure?
Leave your answer as a mixed number.



Ans: _____ m

- 7 Mrs Tan bought $\frac{4}{7}$ kg of beef. She used $\frac{5}{6}$ of it to make some pies.
How much beef did she use to make the pies?
Express your answer as a fraction in its simplest form.

Ans: _____ kg

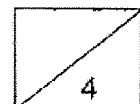


- 8 Cassandra had 64 hair clips. She packed them into as many packets of 5 hair clips as possible. She sold these packets of hair clips for \$7 each. The remaining hair clips were sold at \$1.90 each. How much did she collect from the sale of all the hair clips?

Ans: \$ _____

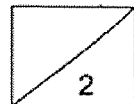
- 9 A number when divided by 500 gives a quotient of 1712. What is the quotient when the same number is divided by 40?

Ans: _____



- 10 There are three times as many \$2 notes as \$1 coins in a bag.
The total amount in the bag is \$462. How many \$1 coins are there?

Ans: _____



Section C

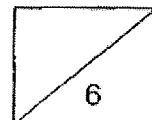
For questions 11 to 13, show your working clearly in the space provided for each question and write the answers in the spaces provided. The number of marks available is shown in the brackets [] at the end of each question or part-question. (10 marks)

- 11 Alsa had some cream cheese. She used $\frac{1}{4}$ of it to bake a cake and $\frac{1}{3}$ of it to bake bread. She was left with 300g of cream cheese. How much cream cheese did she use to bake the cake?

Ans: _____ [3]

- 12 A bag costs 3 times as much as a pencil box.
Mrs Chew paid a total of \$54 for 2 bags and 3 pencil boxes.
What is the difference in price between a bag and a pencil box?

Ans: _____ [3]



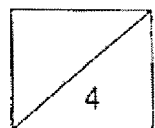
13 Jerome spent $\frac{1}{4}$ of his pocket money on books, $\frac{2}{9}$ of the remainder on magazines and saved the rest.

- (a) What fraction of his pocket money did Jerome save?
Leave your answer in the simplest form.
- (b) Jerome saved \$8.40 more than the amount he spent on books.
How much was his pocket money?

Ans: (a) _____ [1]

(b) _____ [3]

End of Paper
--- CHECK YOUR WORK CAREFULLY ---



SCHOOL : AITONG SCHOOL
LEVEL : PRIMARY 5
SUBJECT : MATH
TERM : TERM 1 (2023)

Q1)	6402808
Q2)	360000
Q3)	70000
Q4)	42
Q5)	0.625
Q6)	$3\frac{1}{3}$ m
Q7)	$\frac{10}{21}$ kg
Q8)	\$912.60
Q9)	21400
Q10)	60
Q11)	$800 \div 5 = 160$ $160 \times 3 = 480$ g
Q12)	$6 + 3 = 9$ $54 \div 9 = 6$ $6 \times 3 = 18$ $18 - 6 = \$12$
Q13)	a) $\frac{7}{12}$ b) $3 + 3 + 1 = 7$ $7 - 3 = 4$ $840 \div 4 = 210$ $210 \times 12 = \$2520$