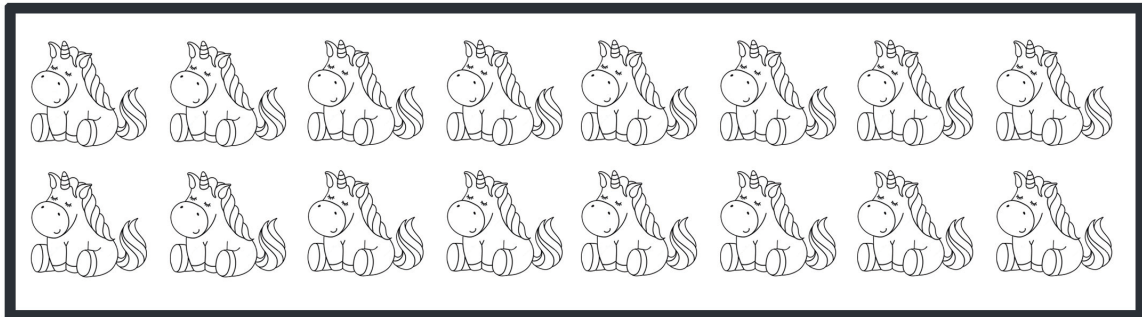


THE LEARNINGS SPACE.SG


BEING GIFTED MATH ASSESSMENT (5 TO 6 YEARS-OLD)

1)




HOW MANY UNICORNS ARE THERE?

2)



3)



CIRCLE THE LARGEST WASP.

4) COUNT IN TENS



5) COUNT ON 2. WRITE IN THE NUMBER

0 to 20 Number Line



COUNT ON 2

9 →

COUNT ON 2

17 →

Looking for a tutor or more testpapers? Visit www.learningspace.sg